

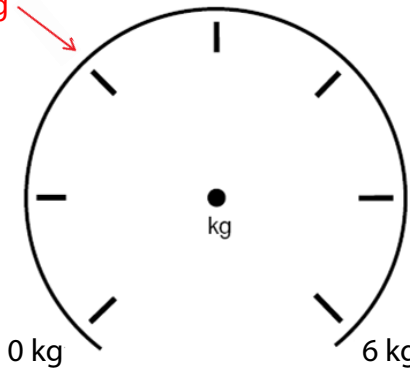


Мерни скали

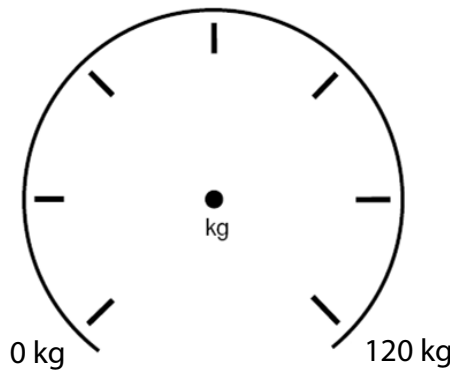


1 Означи каде стрелката ќе ја покажува дадената маса.

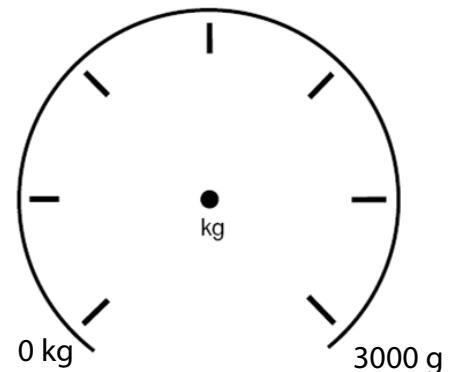
2 kg



- a) 2 kg
- б) 3.5 kg
- в) 500 g
- г) 4 kg 300g

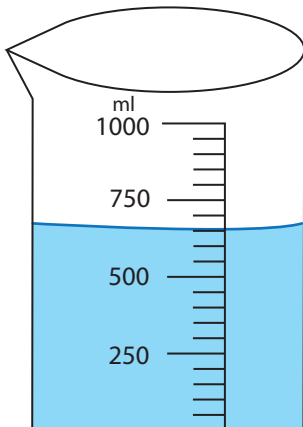


- a) 100 kg
- б) 25 kg
- в) 50 kg
- г) 40 kg 5000 g

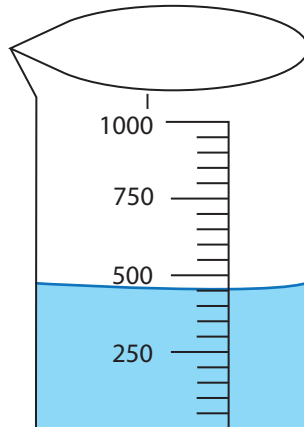


- a) 1/2 kg
- б) 500 g
- в) 1 kg 200 g
- г) 2 kg 800g

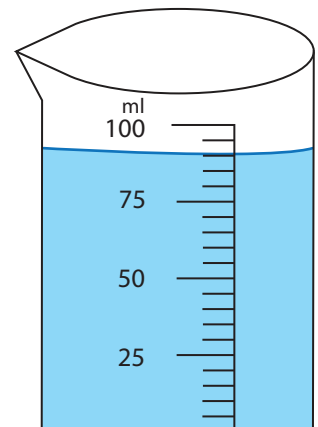
2 Прочитај и запиши по колку течност има во секој сад.



_____ ml

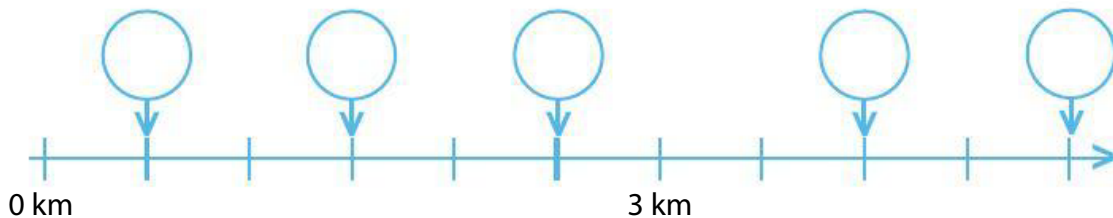


_____ l



_____ ml

3 Запиши ја должината од мерната скала.



0 m

450 m